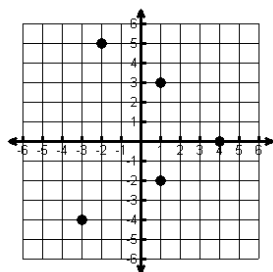


# Domain and Range

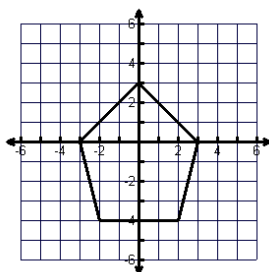
Name: \_\_\_\_\_

State the domain and range for each graph and whether or not the graph is a function (write yes or no).  
Also state whether the graph is discrete or continuous.

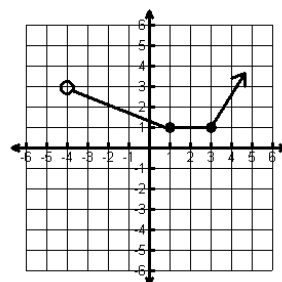
1	Set	Interval
D		
R		
Function?		



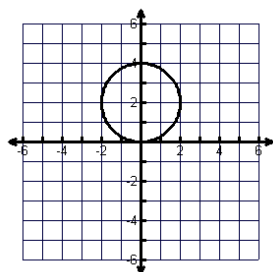
2	Set	Interval
D		
R		
Function?		



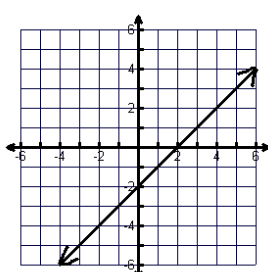
3	Set	Interval
D		
R		
Function?		



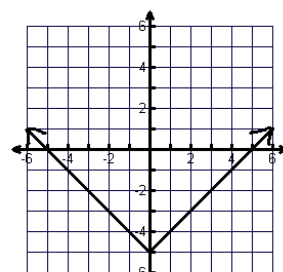
4	Set	Interval
D		
R		
Function?		



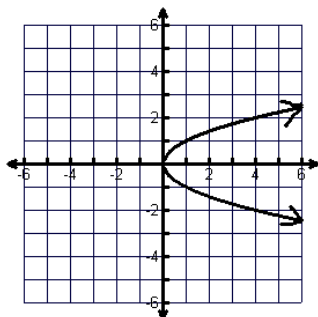
5	Set	Interval
D		
R		
Function?		



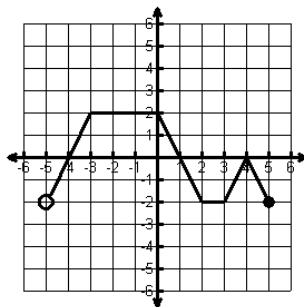
6	Set	Interval
D		
R		
Function?		



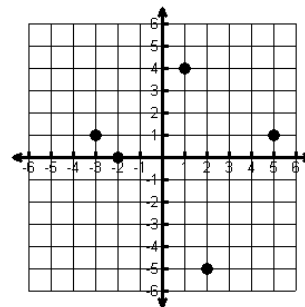
7	Set	Interval
D		
R		
Function?		



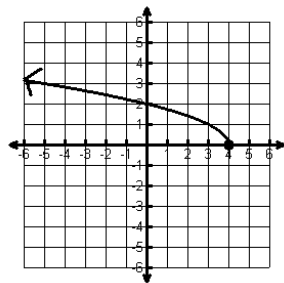
8	Set	Interval
D		
R		
Function?		



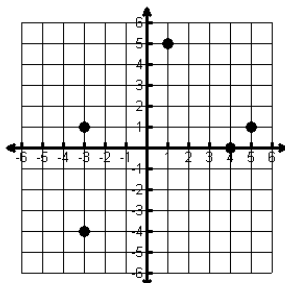
9	Set	Interval
D		
R		
Function?		



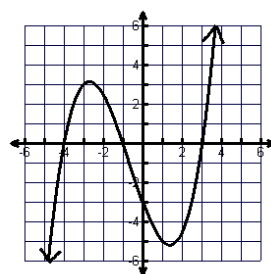
10	Set	Interval
D		
R		
Function?		



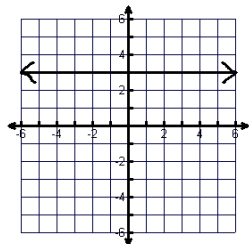
11	Set	Interval
D		
R		
Function?		



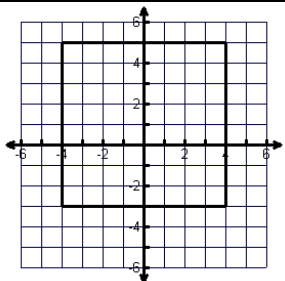
12	Set	Interval
D		
R		
Function?		



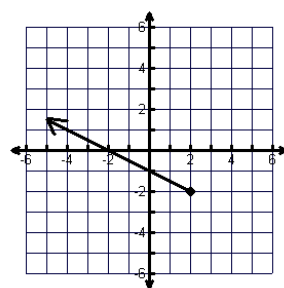
13	Set	Interval
D		
R		
Function?		



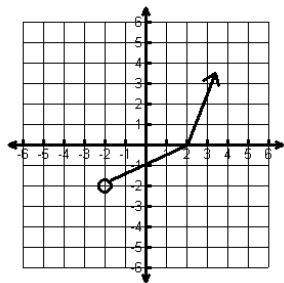
14	Set	Interval
D		
R		
Function?		



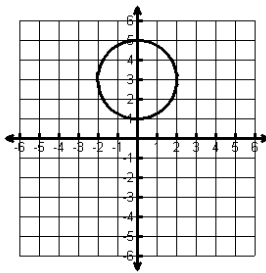
15	Set	Interval
D		
R		
Function?		



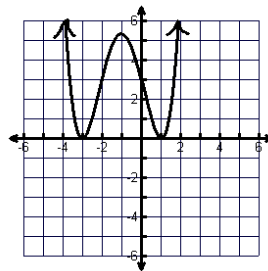
16	Set	Interval
D		
R		
Function?		



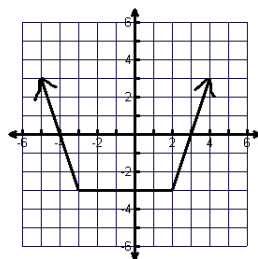
17	Set	Interval
D		
R		
Function?		



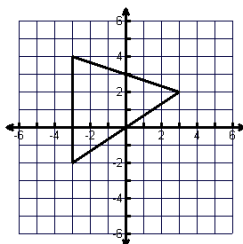
18	Set	Interval
D		
R		
Function?		



19	Set	Interval
D		
R		
Function?		



20	Set	Interval
D		
R		
Function?		



21	Set	Interval
D		
R		
Function?		

